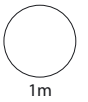
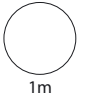


1

$$12 \times 8 = \boxed{}$$

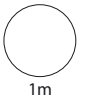


$$6 \times \boxed{} = 540$$

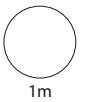


2

$$50\text{mm} = \boxed{} \text{cm}$$

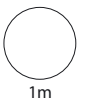


$$600\text{cm} = \boxed{} \text{m}$$



3

$$15 - 7 = 6 + \boxed{}$$

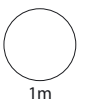


4 Write in order.

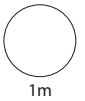
3.5 3.29 3.07 3.1

smallest

largest



5 Work out $\frac{7}{8}$ of 24



6



Buy: £1.50 a pack

Sell: £2.25 a pack

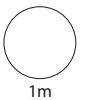
Sita buys 4 packs. Then she sells them all.

How much **profit** does she make?



7

$$2700 \div 30 =$$

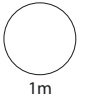


Write a number sentence to check your answer.

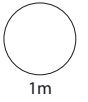
$$\boxed{} \times \boxed{} = \boxed{}$$



8 Write $\frac{1}{5}$ as a **decimal**.


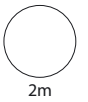


Write 25% as a **fraction**.

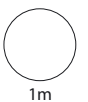


9 20 bags of rice cost £120

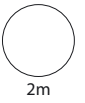

How much do 11 bags cost?

10 Work out 30% of £150



11 Work out 48×25



12

30 children



boys

Ratio
1:2



girls

How many **girls** are there?

