

Every month,
2 teeth fall out but **6 more** grow.



How many teeth will the dragon have when it is **3** months old?

Age of the dragon	Number of teeth
1 month old	6
2 months old	10
3 months old	



How many teeth will the dragon have when it is **12** months old?



teeth

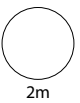


When the dragon is **100** months old it will have **402** teeth!

How many teeth will it have when it is **90** months old?



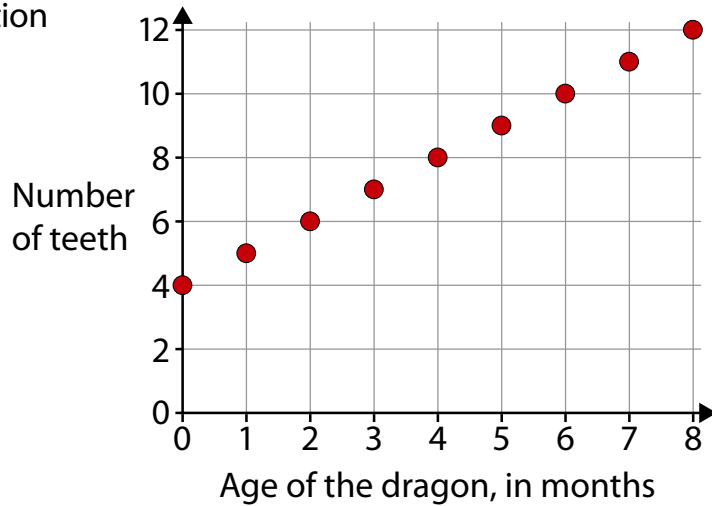
teeth



This is a different dragon.

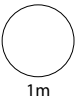


The graph shows information about how its teeth grow.



Use the graph to work out the missing numbers below.

When the dragon is born it has teeth.



Every month it loses **2** teeth but it grows more.

